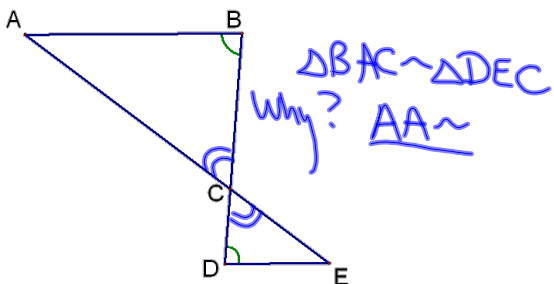


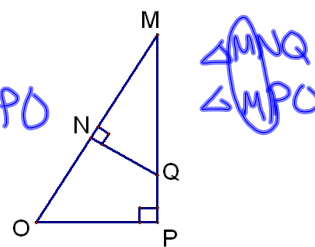
7-3 Angle Angle Similarity

Postulate 15-AA~ Postulate-If 2 \angle s of 1 \triangle are \cong to 2 \angle s of another \triangle . Then the \triangle s are similar.



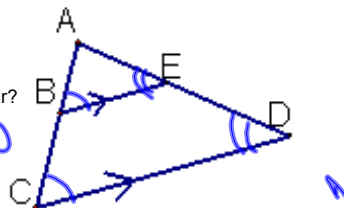
Are the triangles similar?

$\triangle MNG \sim \triangle MPO$
Why? AA~

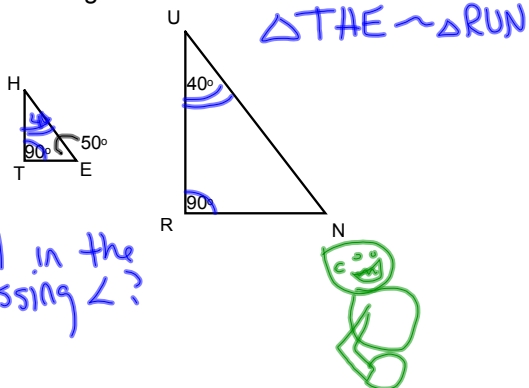


Are the triangles similar?

$\triangle ABE \sim \triangle ACD$
Why? AA~



Are the triangles similar?



~~HW~~ CW

p375-376

#s 7-12, 16-22